



6th Grade Tier 3

Winter Screening Packet

*This screener measures end-of-year benchmarks selected from
3rd and 4th grade content standards.*

Table of Contents

Preparation for Readiness Screening	3
A. Teacher Account Preparation for Online Screening	
B. Access to the Student Dashboard	
C. Sign Out to Resume a Student Screener	
D. Script Notes	
E. Materials Checklist for Online Screening	
Script for Online Screening	6-16
Work Paper Blackline Masters	17-20

Preparation for Readiness Screening

A. Teacher Account Preparation for Online Screening *(Video support is available.)*

1. **Verify** how your students will get to inqwizit.oaisd.org. (*Internet Explorer is not recommended.*)


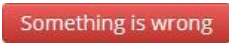
2. **Sign in** using your teacher username and password.

Username: _____ Password: _____

3. **Write** the name of the course to be screened in the empty box on page 8 of the script.

4. Click on the name of the course. *(Right side of screen, under **MY INACTIVE COURSES**)*



5. Please **verify** the student roster for this course (if prompted).

- If the roster is **correct**, select 
- If the roster is **not correct**, select . Then, ask your building administrator to add the student(s) to the course.

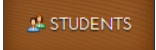
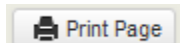
6. **Subscribe** the course to Delta Math.

- Click Subscribe for the available Delta Math screening cycle. *(Right side of screen, Under **AVAILABLE PROGRAMS**)*


7. **Assign & View** a readiness screener to the course and make it **available** to students.

- Click Assign & View for a grade level readiness screener.
- Change the availability from  to .

8. **Print** the course list that includes each student username and password.


- Click the  tab. *(Top of screen)*
- Click on the name of the course. *(Right side of screen)*
- Click .

Option: Create a Course PIN to help all students in the class to sign in using a common PIN.


- Click the  tab. *(Top of screen)*
- Click **Course PIN: Set PIN**
- Set the PIN for the class. *(This PIN will only be active for the date you choose.)*


Note: To add additional screeners, click on the class name from the Dashboard and repeat step 6.

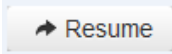

B. Access to the Student Dashboard

- a. Click on the student's name to return to the dashboard.
- b. Choose the correct screener.
- c. Click  .

C. Sign Out and Resume a Student Screener

- a. Click  to end a screener that needs to be completed at a later time.

Note: Do not click  ...screeners cannot be resumed after they have been turned in.

- b. The next time a student signs in, click  and  .

Note: Each screener will resume on the question the student was on when he/she signed out.

D. Script Notes

1. Additional helpers could sign in each student prior to the group entering the computer lab using a Course PIN or each student’s username and password.
2. Say what is in bold text and do what is in italicized text.
3. Include an appropriate pause at the end of each statement.
4. Provide the recommended wait time for each problem. To maintain a calm environment, if the recommended wait time elapses and a student is finishing up a problem, you may provide up to 15 extra seconds before asking the group to click to the next problem.
5. This screener may be completed in more than one session to avoid skewed data due to assessment fatigue.
 - a. To continue the screener at a later time, ask students to click “Sign Out”, and then verify the choice by clicking “Sign Out” again.
 - b. As long as a student does not “Turn In” their screener, the screener can be “Resumed” at a later time.
6. Students will be directed to write and solve longer computational problems on work paper.
7. Proficiency with the math facts is measured online and the benchmark for demonstrating proficiency is 10 or more correct in 1 minute 30 seconds.

E. Materials Checklist for Online Screening

Student Usernames and Passwords (<i>Or, an active Course PIN</i>)	Yes <input type="checkbox"/>
Online Screening Script	Yes <input type="checkbox"/>
Timer to track recommended wait time	Yes <input type="checkbox"/>
Work Paper (Delta Math, blank or lined)	Yes <input type="checkbox"/>
Pencils	Yes <input type="checkbox"/>

Script for Online Readiness Screening

(Total Time: 55 minutes)

Verify that all students are online at <https://inqwizit.oaisd.org>

- Note: Skip steps 1-2 if students were signed in ahead of time using a Course PIN.

1. Click in each box to enter your username and password.

(Look for hands.)

2. Click SIGN IN. Raise your hand if you need help with your username or password.

(Look for hands.)

Look in the upper right part of your screen. If you see the word “Change” make sure you see our school district. If it is not our school district click on CHANGE and choose our school district.

On the right side of the screen click on the name of our course...



(Look for hands.)

Click START for the Winter – Grade 6 Tier 3 screener, then stop and listen for directions.

This readiness screener will help me see what you understand so I can plan my teaching.

Do not move ahead of the whole group. After I read each question, you will be given time to complete it.

Once you move to the next question, please do not go back.

For multiple choice questions, if you don't see your answer, please do not choose one.

If you click SIGN OUT or TURN IN without being asked, click CANCEL to continue this screener.

Take a deep breath, relax and try your best!

Click BEGIN.

Question 1...scissors

If you don't see scissors, please raise your hand.

(Look for hands.)

On your paper, add 483 plus 312. Then, type your answer in the empty box.

(Wait 45 seconds.)

Click NEXT to go to question 2.

Question 2...present

If you don't see a present, please raise your hand.

(Look for hands.)

On your paper, add 453 plus 286. Then, type your answer in the empty box.

(Wait 45 seconds.)

Click NEXT to go to question 3.

Question 3...picnic basket

If you don't see a picnic basket, please raise your hand.

(Look for hands.)

On your paper, add 375 plus 486. Then, type your answer in the empty box.

(Wait 45 seconds.)

Click **NEXT**.

Question 4...wallet

(Look for hands.)

On your paper, subtract 700 minus 354. Then, type your answer in the empty box.

(Wait 45 seconds.)

Click **NEXT**.

Question 5...price tag

(Look for hands.)

On your paper, subtract 827 minus 263. Then, type your answer in the empty box.

(Wait 45 seconds.)

Click **NEXT**.

Question 6...pencil

(Look for hands.)

On your paper, subtract 527 minus 149. Then, type your answer in the empty box.

(Wait 45 seconds.)

Click **NEXT**.

Question 7...hand

(Look for hands.)

On your paper, multiply 487 times 3. Then, type your answer in the empty box.

(Wait 45 seconds.)

Click **NEXT**.

Question 8...soccer ball

(Look for hands.)

On your paper, multiply 6,287 times 4. Then, type your answer in the empty box.

(Wait 45 seconds.)

Click **NEXT**.

Question 9...stars

(Look for hands.)

On your paper, multiply 63 times 15. Then, type your answer in the empty box.

(Wait 1 minute.)

Click **NEXT**.

Question 10...drum

(Look for hands.)

On your paper, divide 32 by 5. Then, click your answer.

(Wait 45 seconds)

Click **NEXT**.

Question 11...house

(Look for hands.)

On your paper, divide 504 by 8. Then, type your answer in the empty box.

(Wait 45 seconds.)

Click **NEXT**.

Question 12...butterfly

(Look for hands.)

On your paper, divide 8,415 by 5. Then, type your answer in the empty box.

(Wait 45seconds.)

Click **NEXT**.

Question 13...apple

(Look for hands.)

Which fraction has a denominator of 7 and a numerator of 5?

Please do not guess.

(Wait 30 seconds.)

Click **NEXT**.

Question 14...key

(Look for hands.)

Each section of the rectangle below is the same size.

What fractional part of the rectangle appears to be shaded?

(Wait 30 seconds.)

Click **NEXT**.

Question 15...bag

(Look for hands.)

Which diagram appears to show fractional parts of one-fourth?

(Wait 30 seconds.)

Click **NEXT**.

Question 16...books

(Look for hands.)

What is the name of each equal part between 0 and 1?

(Wait 20 seconds.)

Click **NEXT**.

Question 17...fence

(Look for hands.)

What fraction is shown by point D?

(Wait 30 seconds.)

Click **NEXT**.

Question 18...earth

(Look for hands.)

What fraction is shown by point Q?

(Wait 30 seconds.)

Click **NEXT**.

Question 19...baseball

(Look for hands.)

Which sign compares the two fractions?

Remember to use your paper and pencil if necessary.

(Wait 30 seconds.)

Click **NEXT**.

Question 20...crown

(Look for hands.)

Which sign compares the two fractions?

(Wait 30 seconds.)

Click **NEXT**.

Question 21...calculator

(Look for hands.)

Which sign compares the two fractions?

(Wait 30 seconds.)

Click **NEXT**.

Question 22...football

(Look for hands.)

Which sign compares the two fractions?

(Wait 45 seconds.)

Click **NEXT**.

Question 23...sign

(Look for hands.)

Which sign compares the two fractions?

(Wait 45 seconds.)

Click **NEXT**.

Question 24...flower

(Look for hands.)

Which sign compares the two fractions?

(Wait 45 seconds.)

Click **NEXT**.

Question 25...basketball

(Look for hands.)

The mixed number 3 and one-fourth is equivalent to which expression?

(Wait 45 seconds.)

Click **NEXT**.

Question 26...pen

(Look for hands.)

The mixed number 2 and five-sixths is equivalent to which fraction?

(Wait 45 seconds.)

Click **NEXT**.

Question 27...tree

(Look for hands.)

The improper fraction thirteen-fifths is equivalent to which mixed number or fraction?

(Wait 45 seconds.)

Click **NEXT**.

Question 28...runner

(Look for hands.)

On your paper, add four and three-fifths plus two and three-fifths.

Then, click your answer.

(Wait 45 seconds.)

Click **NEXT**.

Question 29...truck

(Look for hands.)

On your paper, subtract six and five-sevenths minus three and one-seventh.

Then, click your answer.

(Wait 45 seconds.)

Click **NEXT**.

Question 30...light bulb

(Look for hands.)

On your paper, subtract six and one-third minus one and two-thirds.

Then, click your answer.

(Wait 45 seconds.)

Click **NEXT**.

Question 31...scissors

(Look for hands.)

The fraction one-half times three is equivalent to which expression?

(Wait 45 seconds.)

Click **NEXT**.

Question 32...present

(Look for hands.)

On your paper, multiply four times one-third. Then, click your answer.

(Wait 45 seconds.)

Click **NEXT**.

Question 33...picnic basket

(Look for hands.)

On your paper, multiply five times three-fourths. Then, click your answer.

(Wait 45 seconds.)

Question 34...wallet

(Look for hands.)

Do not click on anything until I ask you to.

On the next screen you will see some multiplication problems.

Type your answer in each box.

You will have 1 minute and 30 seconds to answer as many problems as possible.

Then, wait for directions before clicking next.

Please click on “START QUESTION”.

(Wait 1 minute 30 seconds.)

Click **NEXT**.

Question 35...price tag

(Look for hands.)

Do not click on anything until I ask you to.

On the next screen you will see some division problems.

Type your answer in each box.

You will have 1 minute and 30 seconds to answer as many problems as possible.

Then, wait for directions before clicking next.

Please click on “START QUESTION”.

(Wait 1 minute 30 seconds.)

Click **TURN IN, then click **TURN IN** again to save your answers.**

This math screener is now finished, thank you for trying your best!

Please click **SIGN OUT to end this session.**



Work Paper

Name: _____

A large blank coordinate grid consisting of a vertical y-axis and two horizontal x-axes, creating four quadrants for graphing.



Work Paper

Name: _____

A large grid for work, consisting of a vertical line and two horizontal lines that intersect to form four quadrants. The vertical line runs from the top of the page to the bottom, and the two horizontal lines run across the width of the page.



Work Paper

Name: _____



Work Paper

Name: _____
