


4th Grade Tier 3 Screener - Spring

Questions 1-3: Find the number shown by the base-ten blocks.

1.



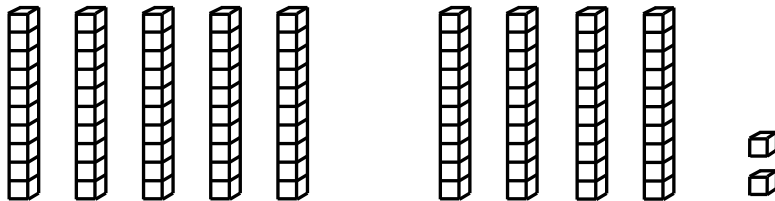
68

85

63

58

2.



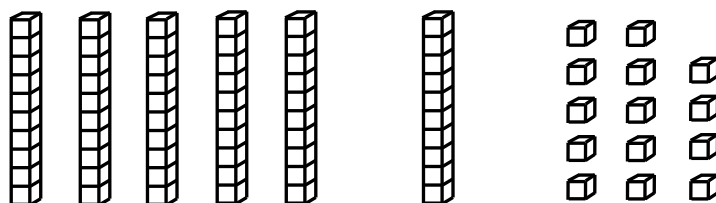
29

92

82

11

3.



74

64

84

79



4th Grade Tier 3 Screener - Spring

(continued)

Questions 4-6: Mentally add and subtract by 10.

4.

10 more than 34

24

44

33

35

5.

10 less than 57

47

67

56

58

6.

10 more than 89

79

88

99

90



Please stop, put your pencil down and wait for the next directions.

4th Grade Tier 3 Screener - Spring

(continued)

Questions 7-9: Compare the numbers. (<, >, =)

7.

$$72 \quad \underline{\quad} \quad 69$$

>

<

=

8.

$$49 \quad \underline{\quad} \quad 51$$

>

<

=

9.

$$85 \quad \underline{\quad} \quad 58$$

>

<

=



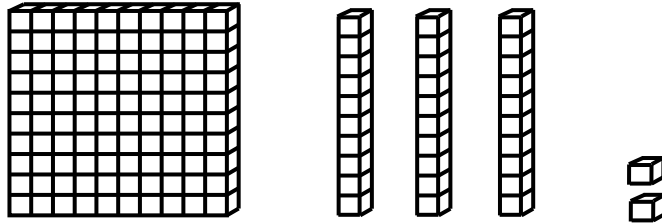
Please stop, put your pencil down and wait for the next directions.

4th Grade Tier 3 Screener - Spring

(continued)

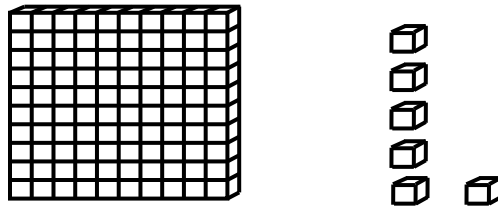
Questions 10-12: Find the number shown by the base ten blocks.

10.



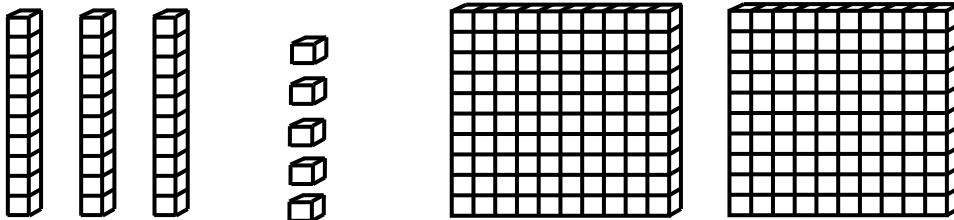
Answer: _____

11.



Answer: _____

12.



Answer: _____



Please stop, put your pencil down and wait for the next directions.



4th Grade Tier 3 Screener - Spring

(continued)

Questions 13-15: Mentally add and subtract by 10 or 100.

13.

$$836 + 100$$

Answer: _____

14.

$$705 - 10$$

Answer: _____

15.

$$628 - 100$$

Answer: _____



Please stop, put your pencil down and wait for the next directions.



4th Grade Tier 3 Screener - Spring

(continued)

Questions 16-18: Compare the numbers. (<, >, =)

16.

$$386 \text{ ___ } 391$$

Answer: _____

17.

$$752 \text{ ___ } 748$$

Answer: _____

18.

$$603 \text{ ___ } 599$$

Answer: _____



Please stop, put your pencil down and wait for the next directions.



4th Grade Tier 3 Screener - Spring

(continued)

Questions 19-21: Add the numbers.

19.

$$\begin{array}{r} 65 \\ + 14 \\ \hline \end{array}$$

Answer: _____

20.

$$57 + 29 = \underline{\quad}$$

Answer: _____

21.

$$\begin{array}{r} 74 \\ + 62 \\ \hline \end{array}$$

Answer: _____



Please stop, put your pencil down and wait for the next directions.

© OAISD, October 2020

Number Correct = _____



4th Grade Tier 3 Screener - Spring

(continued)

Questions 22-24: Subtract the numbers.

22.

$$\begin{array}{r} 78 \\ -25 \\ \hline \end{array}$$

Answer: _____

23.

$$52 - 34 = \underline{\quad}$$

Answer: _____

24.

$$\begin{array}{r} 70 \\ -18 \\ \hline \end{array}$$

Answer: _____



Please stop, put your pencil down and wait for the next directions.

4th Grade Tier 3 Screener - Spring

(continued)

25. When you are told to begin, answer as many as you can in 1 minute.

$4 + 5 = \underline{\quad}$

$7 + 3 = \underline{\quad}$

$6 + 4 = \underline{\quad}$

$4 + 2 = \underline{\quad}$

$3 + 4 = \underline{\quad}$

$7 + 2 = \underline{\quad}$

$5 + 5 = \underline{\quad}$

$1 + 7 = \underline{\quad}$

$6 + 3 = \underline{\quad}$

$4 + 4 = \underline{\quad}$

$2 + 5 = \underline{\quad}$

$8 + 2 = \underline{\quad}$

$3 + 3 = \underline{\quad}$

$5 + 3 = \underline{\quad}$



Please stop, put your pencil down and wait for the next directions.



4th Grade Tier 3 Screener - Spring

(continued)

Question 26. When you are told to begin, answer as many as you can in 1 minute.

$7 + 5 = \underline{\quad}$

$5 + 9 = \underline{\quad}$

$9 + 8 = \underline{\quad}$

$4 + 8 = \underline{\quad}$

$6 + 7 = \underline{\quad}$

$8 + 8 = \underline{\quad}$

$8 + 6 = \underline{\quad}$

$9 + 3 = \underline{\quad}$

$7 + 9 = \underline{\quad}$

$8 + 7 = \underline{\quad}$

$9 + 9 = \underline{\quad}$

$8 + 5 = \underline{\quad}$

$9 + 6 = \underline{\quad}$

$7 + 7 = \underline{\quad}$



Please stop, put your pencil down and wait for the next directions.

4th Grade Tier 3 Screener - Spring

(continued)

27. When you are told to begin, answer as many as you can in 1 minute.

$6 - 2 = \underline{\quad}$

$10 - 3 = \underline{\quad}$

$9 - 6 = \underline{\quad}$

$10 - 5 = \underline{\quad}$

$7 - 1 = \underline{\quad}$

$8 - 4 = \underline{\quad}$

$6 - 5 = \underline{\quad}$

$9 - 3 = \underline{\quad}$

$9 - 1 = \underline{\quad}$

$7 - 6 = \underline{\quad}$

$10 - 8 = \underline{\quad}$

$8 - 2 = \underline{\quad}$

$8 - 7 = \underline{\quad}$

$7 - 3 = \underline{\quad}$



Please stop, put your pencil down and wait for the next directions.



4th Grade Tier 3 Screener - Spring

(continued)

Question 28. When you are told to begin, answer as many as you can in 1 minute.

$13 - 5 = \underline{\quad}$

$16 - 9 = \underline{\quad}$

$11 - 2 = \underline{\quad}$

$12 - 6 = \underline{\quad}$

$11 - 7 = \underline{\quad}$

$15 - 8 = \underline{\quad}$

$14 - 5 = \underline{\quad}$

$13 - 9 = \underline{\quad}$

$12 - 9 = \underline{\quad}$

$16 - 8 = \underline{\quad}$

$12 - 3 = \underline{\quad}$

$11 - 8 = \underline{\quad}$

$14 - 7 = \underline{\quad}$

$15 - 6 = \underline{\quad}$



Please stop, put your pencil down and wait for the next directions.