


# 3<sup>rd</sup> Grade Tier 3 Screener - Spring

Questions 1-3: Count the dots and draw a line below the total number of dots.

1.




10

7

8

9

2.




11

12

13

14

3.



17

18

19

20



Please stop, put your pencil down and wait for the next directions.



# 3<sup>rd</sup> Grade Tier 3 Screener - Spring

(continued)

Questions 4-6: Draw a line below the number that is greater or less.

4.

Greater

7

5

5.

Greater

3

8

6.

Less

9

6




Please stop, put your pencil down and wait for the next directions.

# 3<sup>rd</sup> Grade Tier 3 Screener - Spring

(continued)

Questions 7-9: Draw a line below the answer choice that is equal to the total number of dots.

7.



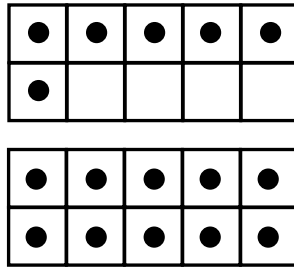
2

12

7

10

8.



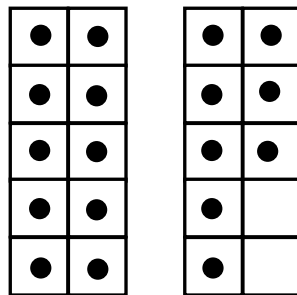
16

61

19

91

9.



81

91

18

19




Please stop, put your pencil down and wait for the next directions.

# 3<sup>rd</sup> Grade Tier 3 Screener - Spring

(continued)

Questions 10-12: Draw a line below the number shown by the base-ten blocks.

**10.**



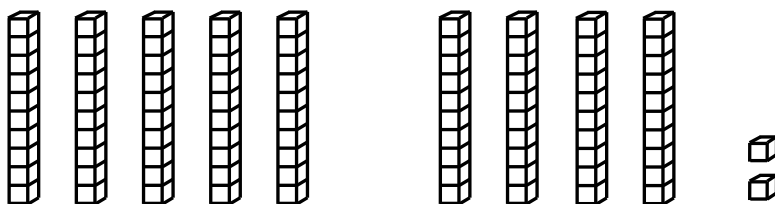
68

85

63

58

**11.**



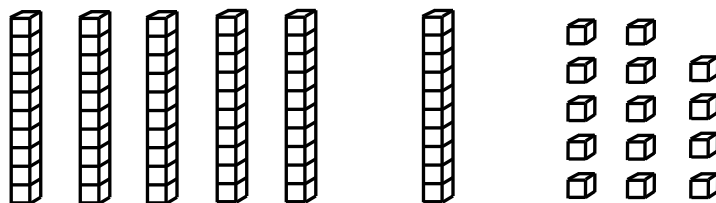
29

92

82

11

**12.**



74

64

84

79



Please stop, put your pencil down and wait for the next directions.

# 3<sup>rd</sup> Grade Tier 3 Screener - Spring

(continued)

Questions 13-15: Draw a line below the sign that compares the two numbers.

**13.**

$$72 \quad \underline{\quad} \quad 69$$

>

<

=

**14.**

$$49 \quad \underline{\quad} \quad 51$$

>

<

=

**15.**

$$85 \quad \underline{\quad} \quad 58$$

>

<

=



Please stop, put your pencil down and wait for the next directions.

# 3<sup>rd</sup> Grade Tier 3 Screener - Spring

(continued)

**Questions 16-18:** Draw a line below the answer choice that is 10 more or 10 less than each number.

**16.**

10 more than 34

24

44

33

35

**17.**

10 less than 57

47

67

56

58

**18.**

10 more than 89

79

88

99

90



Please stop, put your pencil down and wait for the next directions.



# 3<sup>rd</sup> Grade Tier 3 Screener - Spring

(continued)

Questions 19-21: Draw a line below the number that adds to make 10.

**19.**

$$8 + \underline{\quad} = 10$$

1

3

2

4

**20.**

$$4 + \underline{\quad} = 10$$

4

6

5

7

**21.**

$$7 + \underline{\quad} = 10$$

5

2

4

3



Please stop, put your pencil down and wait for the next directions.



# 3<sup>rd</sup> Grade Tier 3 Screener - Spring

(continued)

22. When you are told to begin, answer as many as you can in 1 minute.

$3 + 1 = \underline{\quad}$

$4 + 1 = \underline{\quad}$

$1 + 4 = \underline{\quad}$

$0 + 4 = \underline{\quad}$

$2 + 2 = \underline{\quad}$

$1 + 2 = \underline{\quad}$

$0 + 3 = \underline{\quad}$

$3 + 2 = \underline{\quad}$

$1 + 3 = \underline{\quad}$

$2 + 0 = \underline{\quad}$

$2 + 1 = \underline{\quad}$

$5 + 0 = \underline{\quad}$

$1 + 1 = \underline{\quad}$

$2 + 3 = \underline{\quad}$



Please stop, put your pencil down and wait for the next directions.



# 3<sup>rd</sup> Grade Tier 3 Screener - Spring

(continued)

**23.** When you are told to begin, answer as many as you can in 1 minute.

$4 + 5 = \underline{\quad}$

$7 + 3 = \underline{\quad}$

$6 + 4 = \underline{\quad}$

$4 + 2 = \underline{\quad}$

$3 + 4 = \underline{\quad}$

$7 + 2 = \underline{\quad}$

$5 + 5 = \underline{\quad}$

$1 + 7 = \underline{\quad}$

$6 + 3 = \underline{\quad}$

$4 + 4 = \underline{\quad}$

$2 + 5 = \underline{\quad}$

$8 + 2 = \underline{\quad}$

$3 + 3 = \underline{\quad}$

$5 + 3 = \underline{\quad}$



Please stop, put your pencil down and wait for the next directions.



# 3<sup>rd</sup> Grade Tier 3 Screener - Spring

(continued)

24. When you are told to begin, answer as many as you can in 1 minute.

$2 - 1 = \underline{\quad}$

$5 - 2 = \underline{\quad}$

$4 - 4 = \underline{\quad}$

$3 - 2 = \underline{\quad}$

$5 - 0 = \underline{\quad}$

$4 - 2 = \underline{\quad}$

$4 - 1 = \underline{\quad}$

$3 - 1 = \underline{\quad}$

$5 - 3 = \underline{\quad}$

$1 - 1 = \underline{\quad}$

$5 - 4 = \underline{\quad}$

$2 - 0 = \underline{\quad}$

$2 - 2 = \underline{\quad}$

$4 - 0 = \underline{\quad}$



Please stop, put your pencil down and wait for the next directions.

# 3<sup>rd</sup> Grade Tier 3 Screener - Spring

(continued)

**25.** When you are told to begin, answer as many as you can in 1 minute.

$6 - 2 = \underline{\quad}$

$10 - 3 = \underline{\quad}$

$9 - 6 = \underline{\quad}$

$10 - 5 = \underline{\quad}$

$7 - 1 = \underline{\quad}$

$8 - 4 = \underline{\quad}$

$6 - 5 = \underline{\quad}$

$9 - 3 = \underline{\quad}$

$9 - 1 = \underline{\quad}$

$7 - 6 = \underline{\quad}$

$10 - 8 = \underline{\quad}$

$8 - 2 = \underline{\quad}$

$8 - 7 = \underline{\quad}$

$7 - 3 = \underline{\quad}$



Please stop, put your pencil down and wait for the next directions.