



Visual Guided Practice

Name: _____

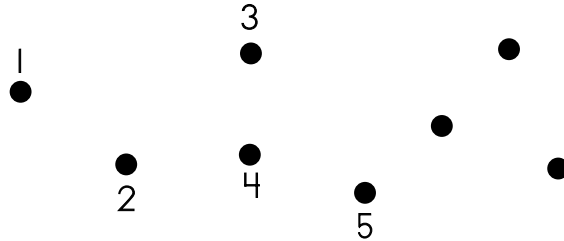
Learning Target: I will count up to 20 objects.

Form A

We Do Together

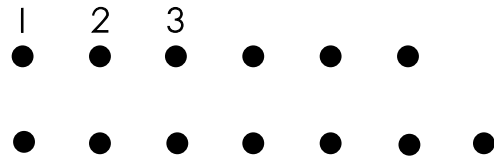
1. Find the total number of dots by saying each counting number and writing the missing numbers.

a.



Total = _____

b.



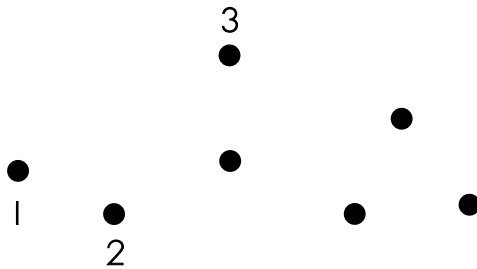
Total = _____

3. Reflect: What questions do you have about counting objects up to 20?

You Do Together


4. Find the total number of dots by saying each counting number and writing the missing numbers.

a.




Total = _____

b.




Total = _____

c.



Total = _____

d.



Total = _____



Visual Guided Practice

Name: _____

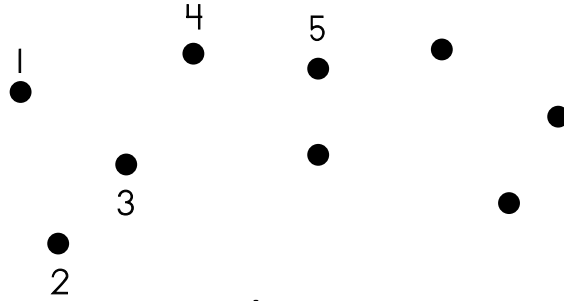
Learning Target: I will count up to 20 objects.

Form B

We Do Together


1. Find the total number of dots by saying each counting number and writing the missing numbers.

a.



Total = _____

b.



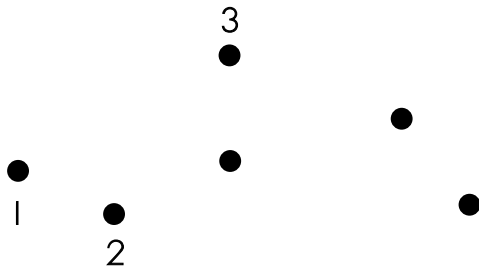
Total = _____

3. Reflect: What questions do you have about counting objects up to 20?

You Do Together


4. Find the total number of dots by saying each counting number and writing the missing numbers.

a.




Total = _____

b.




Total = _____

c.



Total = _____

d.



Total = _____



Visual Guided Practice

Name: _____

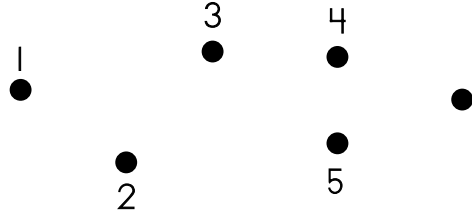
Learning Target: I will count up to 20 objects.

Form C

We Do Together


1. Find the total number of dots by saying each counting number and writing the missing numbers.

a.



Total = _____

b.



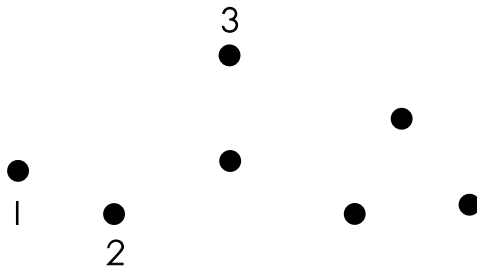
Total = _____

3. **Reflect:** What questions do you have about counting objects up to 20?

You Do Together


4. Find the total number of dots by saying each counting number and writing the missing numbers.

a.




Total = _____

b.




Total = _____

c.



Total = _____

d.



Total = _____