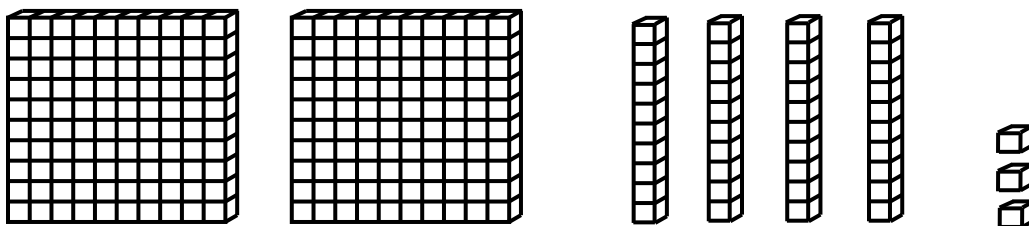


# 3<sup>rd</sup> Grade Readiness: Fall Progress Assessment

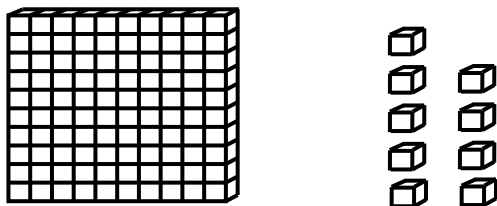
Questions 1-3: Find the number shown by the base ten blocks.

1.



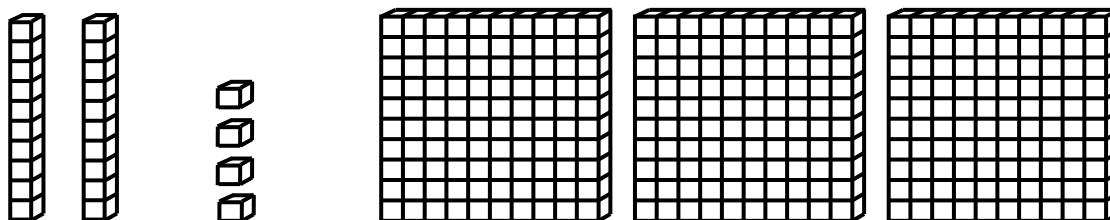
Answer: \_\_\_\_\_

2.



Answer: \_\_\_\_\_

3.



Answer: \_\_\_\_\_



Please stop, put your pencil down and wait for the next directions.



# 3<sup>rd</sup> Grade Readiness: Fall Progress Assessment

(continued)

Questions 4-6: Mentally add and subtract by 10 or 100.

4.

$$647 + 100$$

Answer: \_\_\_\_\_

5.

$$804 - 10$$

Answer: \_\_\_\_\_

6.

$$609 - 100$$

Answer: \_\_\_\_\_



Please stop, put your pencil down and wait for the next directions.



# 3<sup>rd</sup> Grade Readiness: Fall Progress Assessment

(continued)

Questions 7-9: Compare the numbers. (<, >, =)

7.

$$351 \text{ \_\_\_ } 348$$

Answer: \_\_\_\_\_

8.

$$739 \text{ \_\_\_ } 742$$

Answer: \_\_\_\_\_

9.

$$801 \text{ \_\_\_ } 796$$

Answer: \_\_\_\_\_



Please stop, put your pencil down and wait for the next directions.



# 3<sup>rd</sup> Grade Readiness: Fall Progress Assessment

(continued)

Questions 10-12: Add the numbers.

**10.**

$$\begin{array}{r} 46 \\ + 32 \\ \hline \end{array}$$

Answer: \_\_\_\_\_

**11.**

$$58 + 25 = \underline{\quad}$$

Answer: \_\_\_\_\_

**12.**

$$\begin{array}{r} 62 \\ + 54 \\ \hline \end{array}$$

Answer: \_\_\_\_\_



Please stop, put your pencil down and wait for the next directions.



# 3<sup>rd</sup> Grade Readiness: Fall Progress Assessment

(continued)

Questions 13-15: Subtract the numbers.

**13.**

$$\begin{array}{r} 57 \\ -25 \\ \hline \end{array}$$

Answer: \_\_\_\_\_

**14.**

$$52 - 28 = \underline{\quad}$$

Answer: \_\_\_\_\_

**15.**

$$\begin{array}{r} 60 \\ -17 \\ \hline \end{array}$$

Answer: \_\_\_\_\_



Please stop, put your pencil down and wait for the next directions.



# 3<sup>rd</sup> Grade Readiness: Fall Progress Assessment

(continued)

**Question 16.** When you are told to begin, answer as many as you can in 1 minute.

$9 + 3 = \underline{\quad}$

$8 + 6 = \underline{\quad}$

$8 + 8 = \underline{\quad}$

$6 + 7 = \underline{\quad}$

$8 + 7 = \underline{\quad}$

$7 + 9 = \underline{\quad}$

$7 + 5 = \underline{\quad}$

$5 + 9 = \underline{\quad}$

$9 + 8 = \underline{\quad}$

$4 + 8 = \underline{\quad}$

$9 + 6 = \underline{\quad}$

$7 + 7 = \underline{\quad}$

$9 + 9 = \underline{\quad}$

$8 + 5 = \underline{\quad}$



Please stop, put your pencil down and wait for the next directions.



# 3<sup>rd</sup> Grade Readiness: Fall Progress Assessment

(continued)

**Question 17.** When you are told to begin, answer as many as you can in 1 minute.

$12 - 3 = \underline{\quad}$

$11 - 8 = \underline{\quad}$

$13 - 9 = \underline{\quad}$

$14 - 5 = \underline{\quad}$

$16 - 8 = \underline{\quad}$

$12 - 9 = \underline{\quad}$

$11 - 7 = \underline{\quad}$

$15 - 8 = \underline{\quad}$

$12 - 6 = \underline{\quad}$

$11 - 2 = \underline{\quad}$

$16 - 9 = \underline{\quad}$

$13 - 5 = \underline{\quad}$

$15 - 6 = \underline{\quad}$

$14 - 7 = \underline{\quad}$



Please stop, put your pencil down and wait for the next directions.