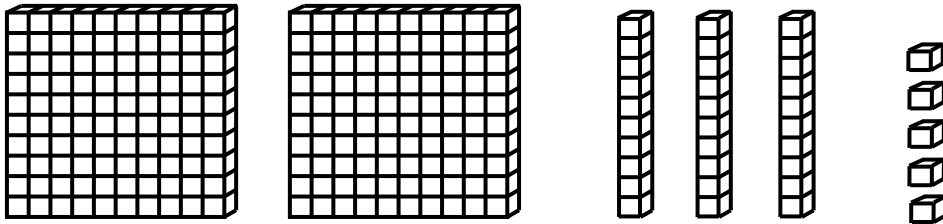


3rd Grade Readiness Screener - Winter

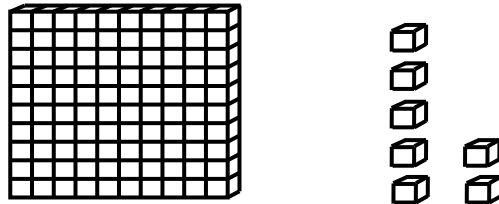
Questions 1-3: Find the number shown by the base ten blocks.

1.



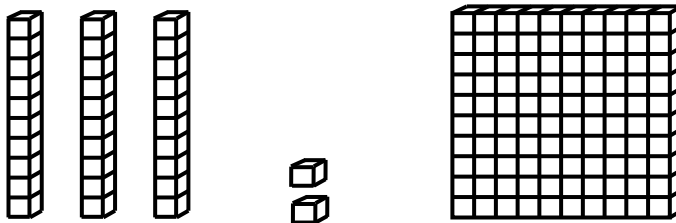
Answer: _____

2.



Answer: _____

3.



Answer: _____



Please stop, put your pencil down and wait for the next directions.



3rd Grade Readiness Screener - Winter

(continued)

Questions 4-6: Mentally add and subtract by 10 or 100.

4.

$$731 + 100$$

Answer: _____

5.

$$508 - 10$$

Answer: _____

6.

$$805 - 100$$

Answer: _____



Please stop, put your pencil down and wait for the next directions.



3rd Grade Readiness Screener - Winter

(continued)

Questions 7-9: Compare the numbers. (<, >, =)

7.

$$574 \text{ ___ } 568$$

Answer: _____

8.

$$836 \text{ ___ } 843$$

Answer: _____

9.

$$397 \text{ ___ } 401$$

Answer: _____



Please stop, put your pencil down and wait for the next directions.



3rd Grade Readiness Screener - Winter

(continued)

Questions 10-12: Add the numbers.

10.

$$\begin{array}{r} 56 \\ + 42 \\ \hline \end{array}$$

Answer: _____

11.

$$48 + 26 = \underline{\quad}$$

Answer: _____

12.

$$\begin{array}{r} 85 \\ + 43 \\ \hline \end{array}$$

Answer: _____



Please stop, put your pencil down and wait for the next directions.



3rd Grade Readiness Screener - Winter

(continued)

Questions 13-15: Subtract the numbers.

13.

$$\begin{array}{r} 68 \\ - 26 \\ \hline \end{array}$$

Answer: _____

14.

$$73 - 45 = \underline{\quad}$$

Answer: _____

15.

$$\begin{array}{r} 80 \\ - 27 \\ \hline \end{array}$$

Answer: _____



Please stop, put your pencil down and wait for the next directions.



3rd Grade Readiness Screener - Winter

(continued)

Question 16. When you are told to begin, answer as many as you can in 1 minute.

$7 + 5 = \underline{\quad}$

$5 + 9 = \underline{\quad}$

$9 + 8 = \underline{\quad}$

$4 + 8 = \underline{\quad}$

$9 + 6 = \underline{\quad}$

$7 + 7 = \underline{\quad}$

$9 + 9 = \underline{\quad}$

$8 + 5 = \underline{\quad}$

$9 + 3 = \underline{\quad}$

$8 + 6 = \underline{\quad}$

$8 + 8 = \underline{\quad}$

$6 + 7 = \underline{\quad}$

$8 + 7 = \underline{\quad}$

$7 + 9 = \underline{\quad}$



Please stop, put your pencil down and wait for the next directions.



3rd Grade Readiness Screener - Winter

(continued)

Question 17. When you are told to begin, answer as many as you can in 1 minute.

$11 - 7 = \underline{\quad}$

$15 - 8 = \underline{\quad}$

$12 - 6 = \underline{\quad}$

$11 - 2 = \underline{\quad}$

$16 - 9 = \underline{\quad}$

$13 - 5 = \underline{\quad}$

$15 - 6 = \underline{\quad}$

$14 - 7 = \underline{\quad}$

$12 - 3 = \underline{\quad}$

$11 - 8 = \underline{\quad}$

$13 - 9 = \underline{\quad}$

$14 - 5 = \underline{\quad}$

$16 - 8 = \underline{\quad}$

$12 - 9 = \underline{\quad}$



Please stop, put your pencil down and wait for the next directions.