



Visual Guided Practice


Name: _____

Learning Target: I will name fractions on a number line.

Form A

1. We Do Together

Draw and label sixths from zero to two



Place and label points each location on the number line


A = one-sixth B = four-sixths C = six-sixths D = ten-sixths

2. Reflect:

What questions do you have about naming fractions on a number line?

3. You Do Together


Draw and label eighths from zero to two



Place and label points each location on the number line

A = three-eighths B = seven-eighths C = fourteen-eighths D = sixteen-eighths

Draw and label thirds from zero to two



Place and label points each location on the number line

A = one-third B = three-thirds C = four-thirds D = six-thirds



Visual Guided Practice


Name: _____

Learning Target: I will name fractions on a number line.

Form B

1. We Do Together

Draw and label eighths from zero to two




Place and label points each location on the number line

A = one-eighth B = four-eighths C = six-eighths D = thirteen-eighths

2. Reflect: What questions do you have about naming fractions on a number line?

3. You Do Together


Draw and label sixths from zero to two



Place and label points each location on the number line

A = two-sixths B = five-sixths C = eight-sixths D = twelve-sixths

Draw and label fourths from zero to two



Place and label points each location on the number line

A = one-third B = three-thirds C = four-thirds D = five-thirds



Visual Guided Practice


Name: _____

Learning Target: I will name fractions on a number line.

Form C

1. We Do Together

Draw and label sixths from zero to two




Place and label points each location on the number line

A = one-sixth B = five-sixths C = seven-sixths D = twelve-sixths

2. Reflect: What questions do you have about naming fractions on a number line?

3. You Do Together


Draw and label eighths from zero to two



Place and label points each location on the number line

A = three-eighths B = five-eighths C = eight-eighths D = thirteen-eighths

Draw and label thirds from zero to two



Place and label points each location on the number line

A = one-third B = two-thirds C = four-thirds D = six-thirds